

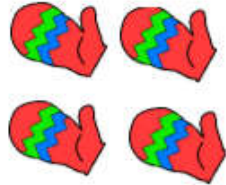


Ich heiÙe

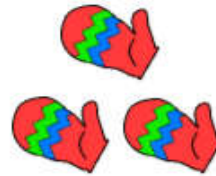
.....

Zähle und zeichne nach.

4




3



$$4 + 3 =$$

3



2



$$3 + 2 =$$

5



1



$$5 + 1 =$$

